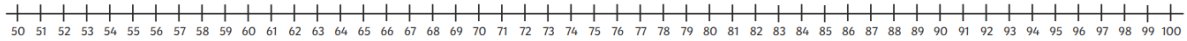
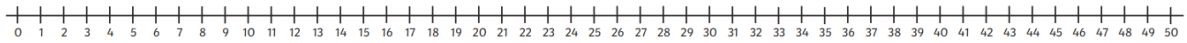
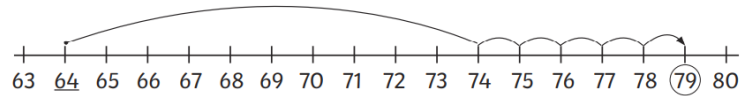


## Maths Homework 26.1.24

Please use the example to help you add the numbers together using the numberline.

Example:  $64 + 15 = 79$



$$73 + 19 = \underline{\quad}$$

$$53 + 13 = \underline{\quad}$$

$$82 + 12 = \underline{\quad}$$

$$44 + 17 = \underline{\quad}$$

$$89 + 11 = \underline{\quad}$$