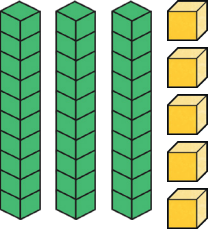
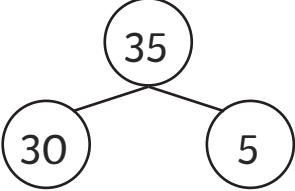
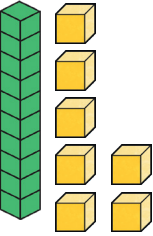
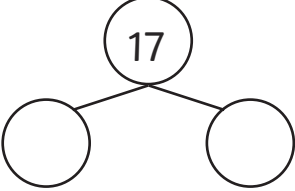
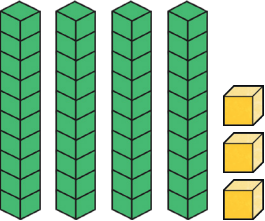
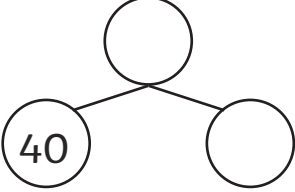
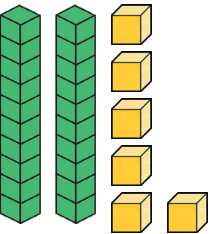
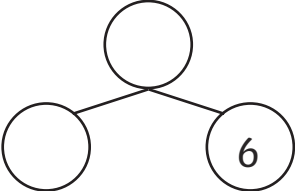
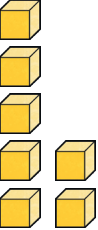
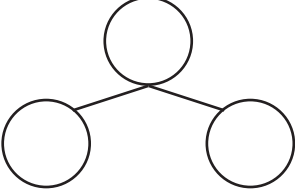
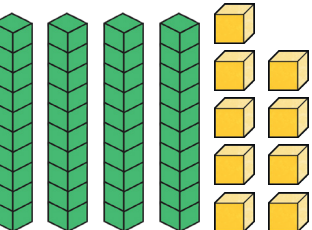
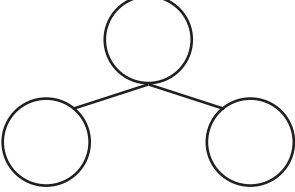


# Partitioning within 50

## Make and Count

Make the amount shown with base ten equipment. Count them and record the total. Fill out the part-whole model by partitioning the total into tens and ones. Then, complete the sentences. The first one has been done for you.

Make	Count	Part-Whole Model	Complete
	35		There are 3 tens. There are 5 ones.
			There are ____ tens. There are ____ ones.
			There are ____ tens. There are ____ ones.
			There are ____ tens. There are ____ ones.
			There are ____ tens. There are ____ ones.
			There are ____ tens. There are ____ ones.