

## Missing Number

Fill in the missing number:

$$9 + \bigcirc = 16$$

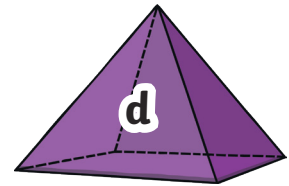
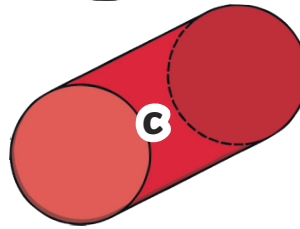
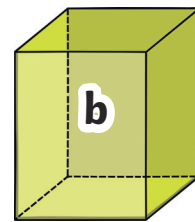
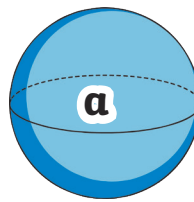
$$18 - \bigcirc = 9$$

$$\bigcirc + 5 = 11$$

$$\bigcirc - 7 = 10$$

## Which shape?

Which shape has six faces?



has 6 faces.

## True or False

Which two sentences are correct?

1. A rectangle has four sides of equal length.
2. A rectangle has lines of symmetry.
3. A rectangle has four corners.
4. A rectangle has curved sides.

The correct sentences are